

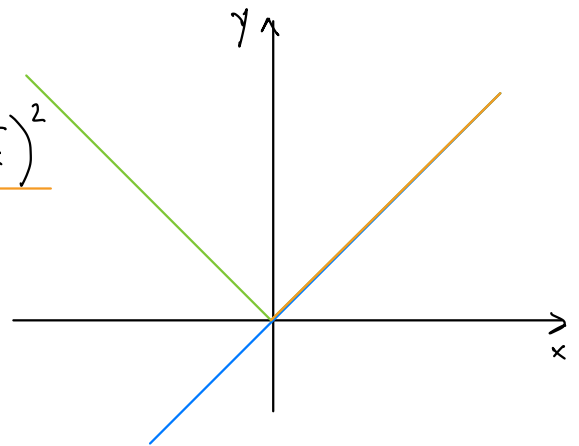
Matematika VSP, vaje, 20.11.2020 (funkcije, odvod)

NALOGA 28.

Ali predpisi x , $\sqrt{x^2}$ ter $(\sqrt{x})^2$ predstavljajo iste funkcije?

$$\underline{f_1(x) = x}, \quad \underline{f_2(x) = \sqrt{x^2}}, \quad \underline{f_3(x) = (\sqrt{x})^2}$$

$$\underline{f_2(x) = |x|}$$



Torej $f_1 \neq f_2$.

Kaj so definicijska območja f_1, f_2, f_3 ?

$D_{f_1} = \mathbb{R}$, $D_{f_2} = \mathbb{R}$, $D_{f_3} = [0, \infty)$ (saj je \sqrt{x} definiran le za $x \geq 0$)
(saj je $x^2 \geq 0$ za $x \in \mathbb{R}$)

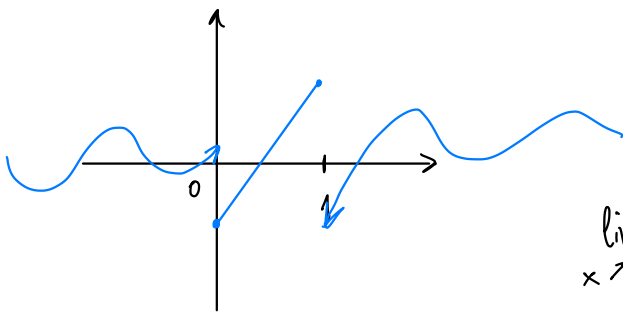
Torej tudi $f_3 \neq f_1$, $f_3 \neq f_2$.

NALOGA 31.

in b

Določi konstanto a /tako, da bo f zvezna funkcija.

$$f(x) = \begin{cases} \frac{\sin(3x)(x-2)}{x}, & x < 0 \\ ax + b, & 0 \leq x \leq 1, \\ 2e^{x-1} - \cos(\pi x), & x > 1 \end{cases}$$



Da bo f zvezna v $x=0$, mora veljati:

$$\lim_{x \rightarrow 0^-} \frac{\sin(3x) \cdot (x-2)}{x} = \lim_{x \rightarrow 0^+} (ax+b) = b$$

||

$$(0-2) \cdot 3 = -6, \text{ torej } \underline{b = -6}.$$

S predavanj:

$$\lim_{x \rightarrow 0} \frac{\sin(kx)}{x} = k.$$

Da bo f zvezna tudi v $x=1$, mora veljati:

$$a+b = \lim_{x \rightarrow 1^-} (ax+b) = \lim_{x \rightarrow 1^+} (2e^{x-1} - \cos(\pi x)) =$$

$$= 2e^{1-1} - \cos(\pi) = 2 - (-1) = 3$$

$$a+b = 3, \quad a-6 = 3, \quad \underline{a = 9}.$$

f bo zvezna za $a = 9$ in $b = -6$.

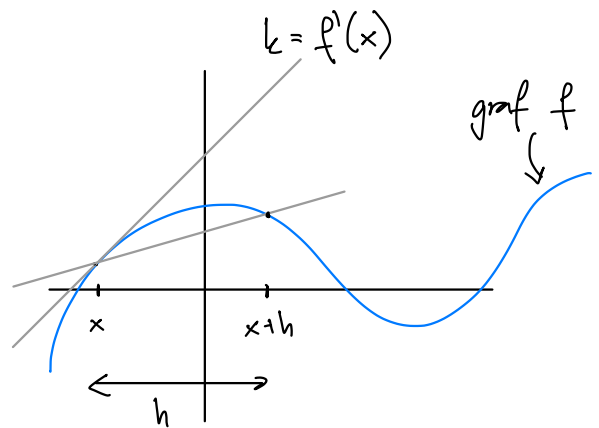
NALOGA 32.

Uporabi definicijo odvoda funkcije f v točki x :

$$f'(x) = \lim_{h \rightarrow 0} \frac{f(x+h) - f(x)}{h}$$

in s pomočjo le-te izračunaj odvod funkcije $f(x) = x^2$.

$$\begin{aligned} f'(x) &= \lim_{h \rightarrow 0} \frac{(x+h)^2 - x^2}{h} = \\ &= \lim_{h \rightarrow 0} \frac{\cancel{x^2} + 2xh + h^2 - \cancel{x^2}}{h} = \\ &= \lim_{h \rightarrow 0} \left(\frac{2xh}{h} + \frac{h^2}{h} \right) = \lim_{h \rightarrow 0} (2x + h) = 2x + 0 = 2x. \end{aligned}$$



NALOGA 33.

S pomočjo pravil za odvajanje izračunaj odvode naslednjih funkcij spremenljivke x :

- | | |
|---|---------------------------------------|
| a. $x^3 + 5x^2 - 3x + 1,$ | i. $\log(\log(x)),$ |
| b. $\frac{2x^2 - 3}{5x + 1},$ | j. $\arcsin(\cos(x)),$ |
| c. $\frac{x}{\sqrt{x^2 + x}},$ | k. $\frac{5^x}{3x^2},$ |
| d. $e^{x^2},$ | l. $\sin^2(-3x),$ |
| e. $\sin(5x),$ | m. $\tan\left(\frac{1}{2x^2}\right).$ |
| f. $\tan(x),$ | |
| g. $\frac{\sin(x) + \cos(x)}{\sin(x) - \cos(x)},$ | |
| h. $x^3 \log(-3x),$ | |

$f(x)$	$f'(x)$
x^n	$n x^{n-1}$
$f_1(x) + f_2(x)$	$f_1'(x) + f_2'(x)$
$C \cdot f(x)$	$C \cdot f'(x)$
$\frac{f_1(x)}{f_2(x)}$	$\frac{f_1' \cdot f_2 - f_1 \cdot f_2'}{(f_2)^2}$
$f_1(f_2(x))$	$f_1'(f_2(x)) \cdot f_2'(x)$
$\sin x$	$\cos x$

NALOGA 34.

Poišči odvode naslednjih funkcij spremenljivke x :

- | | |
|-----------------------------|---------------------------------------|
| a. $\frac{x^3 - x^2}{x^4},$ | h. $\frac{1 + \log(x)}{1 - \log(x)},$ |
|-----------------------------|---------------------------------------|

$$\begin{aligned} 33.(a) \quad (x^3 + 5x^2 - 3x + 1)' &= \frac{d}{dx} (x^3 + 5x^2 - 3x + 1) \\ &= 3x^2 + 5 \cdot 2x - 3 \cdot 1 + 0 = 3x^2 + 10x - 3. \end{aligned}$$

$$(b) \quad \left(\frac{2x^2 - 3}{5x + 1} \right)' = \frac{2 \cdot 2x \cdot (5x + 1) - (2x^2 - 3) \cdot 5}{(5x + 1)^2} = \frac{10x^2 + 4x + 15}{(5x + 1)^2}.$$

$$(e) \quad (\sin(5x))' = \cos(5x) \cdot 5 = 5 \cos(5x).$$

$$\begin{aligned} &\uparrow \\ f_1(x) &= \sin(x), \\ f_2(x) &= 5x \end{aligned}$$

$$(c) \quad \left(\frac{x}{\sqrt{x^2 + x}} \right)' = \frac{1 \cdot \sqrt{x^2 + x} - x \cdot \frac{1}{2\sqrt{x^2 + x}} \cdot (2x + 1)}{(\sqrt{x^2 + x})^2} =$$

$$\begin{aligned} f_1(x) &= \sqrt{x} = x^{1/2} \\ f_1'(x) &= \frac{1}{2} x^{1/2 - 1} = \frac{1}{2} x^{-1/2} \\ &= \frac{1}{2\sqrt{x}} \end{aligned}$$

$$\begin{aligned} &= \frac{\sqrt{x^2+x} - \frac{2x^2+x}{2\sqrt{x^2+x}}}{x^2+x} = \frac{\frac{2(x^2+x) - 2x^2 - x}{2\sqrt{x^2+x}}}{x^2+x} = \\ &= \frac{x}{2(x^2+x)\sqrt{x^2+x}}. \end{aligned}$$

$$34. (a) \left(\frac{x^3 - x^2}{x^4}\right)' = \frac{(3x^2 - 2x) \cdot x^4 - (x^3 - x^2) \cdot 4x^3}{x^8} =$$

$$= \frac{3x^6 - 2x^5 - 4x^6 + 4x^5}{x^8} = -\frac{x^6}{x^8} + \frac{2x^5}{x^8} = -\frac{1}{x^2} + \frac{2}{x^3}.$$

$$\begin{aligned} \left(\frac{x^3}{x^4} - \frac{x^2}{x^4}\right)' &= \left(\frac{1}{x} - \frac{1}{x^2}\right)' = (x^{-1} - x^{-2})' = -1x^{-1-1} - (-2x^{-2-1}) = \\ &= -x^{-2} + 2x^{-3} = -\frac{1}{x^2} + \frac{2}{x^3}. \end{aligned}$$

$$(h) \left(\frac{1 + \log(x)}{1 - \log(x)}\right)' = \frac{\frac{1}{x} \cdot (1 - \log x) - (1 + \log x) \cdot \left(-\frac{1}{x}\right)}{(1 - \log x)^2} = \quad (\log x)' = \frac{1}{x}$$

$$= \frac{1}{x} \frac{1 - \cancel{\log x} + 1 + \cancel{\log x}}{(1 - \log x)^2} = \frac{2}{x(1 - \log x)^2}.$$

OR

NALOGA 35.

Funkcija f ima predpis

$$f(x) = x^3 - 2x^2 + 3.$$

Poišči enačbo tangente na graf te funkcije v točki $(1, f(1))$ ter enačbo normale na graf v točki $(2, f(2))$. (Normala je premica, ki je pravokotna na tangento v dani točki.) V kateri točki se ti dve premici sekata?

Smerni koef. tangente v $(1, f(1)) = (1, 2)$

je $f'(1)$.

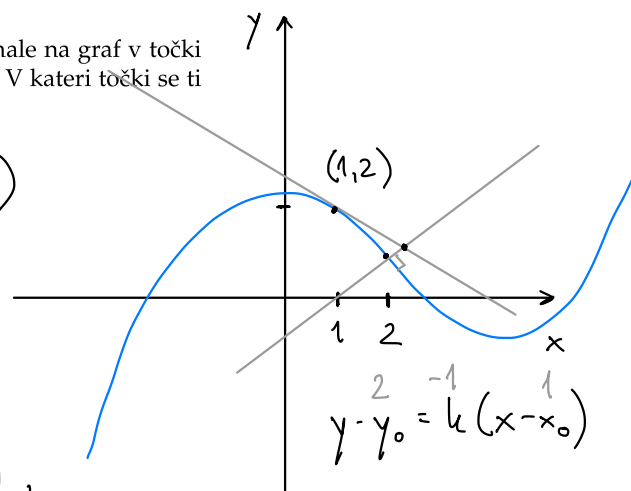
$$f'(x) = 3x^2 - 2 \cdot 2x + 0 = 3x^2 - 4x,$$

$$f'(1) = -1 = k \quad \dots \quad y = kx + n = -x + n,$$

ker gre skozi $(x, y) = (1, 2)$, mora veljati še $2 = -1 + n \dots n = 3$.

Enačba tangente skozi $(1, f(1))$ je torej $y = -x + 3$.

Še normala skozi $(2, f(2)) = (2, 3)$, smerni koef. je $k_n = -\frac{1}{k_t} = -\frac{1}{f'(2)}$.



NALOGA 40.

Z uporabo totalnega diferenciala določi približno vrednost spodnjih izrazov:

a. $\arctan(0.03)$,

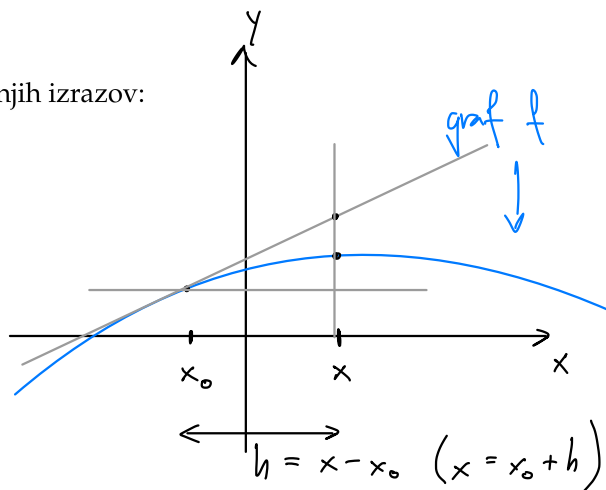
b. $\sqrt{4.1}$,

c. $\sqrt[3]{25}$,

d. $\log(0.9)$.

$$f(x) \doteq f(x_0) + f'(x_0)(x - x_0)$$

$$f(x_0 + h) \doteq f(x_0) + f'(x_0) \cdot h$$



(b) $f(x) = \sqrt{x}$, $f(4.1) \doteq ?$, $f(4) = \sqrt{4} = 2$,

vzemimo $x_0 = 4$, $x = 4.1$, tj. $x - x_0 = 0.1$.

$$f'(x) = \frac{1}{2\sqrt{x}} \text{ , } f'(x_0) = f'(4) = \frac{1}{2\sqrt{4}} = \frac{1}{4} = 0.25.$$

$$\text{Torej: } \sqrt{4.1} = f(4.1) \doteq f(4) + f'(4) \cdot (4.1 - 4) = 2 + 0.25 \cdot 0.1 = 2.025.$$

(c) $\sqrt[3]{25} \doteq ?$ Vemo $\sqrt[3]{27} = 3$, izberemo $f(x) = \sqrt[3]{x} = x^{1/3}$.

$$f'(x) = \frac{1}{3} x^{\frac{1}{3} - 1} = \frac{1}{3} x^{-2/3} = \frac{1}{3\sqrt[3]{x^2}}.$$

$$f(27) = 3 \text{ , } f'(27) = \frac{1}{27}.$$

$$f(25) \doteq f(27) + f'(27) \cdot (25 - 27) = 3 + \frac{1}{27} \cdot (-2) = 3 - \frac{2}{27} = \frac{79}{27}$$